
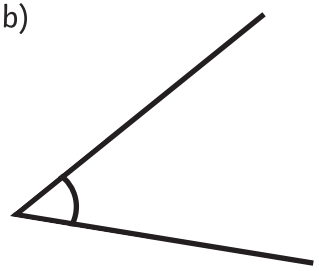
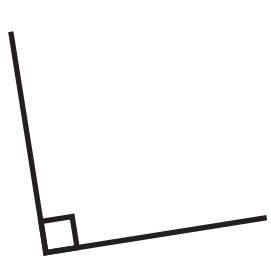


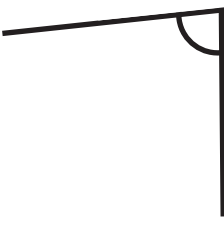
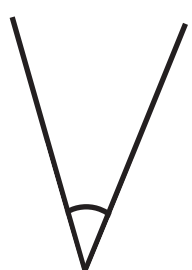
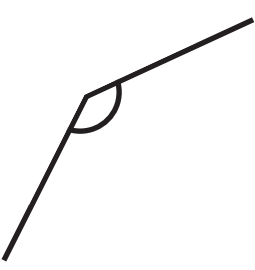
Ordering Angles

Aim: I can order angles.


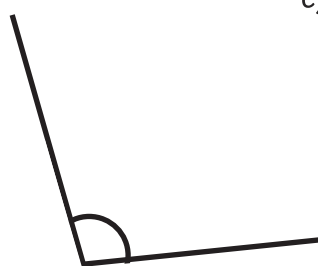
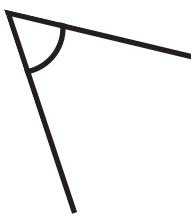
Order these angles from smallest to largest.

1. a)  b)  c) 

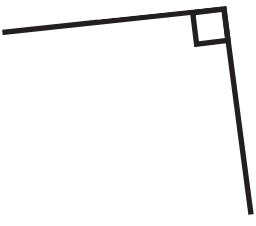
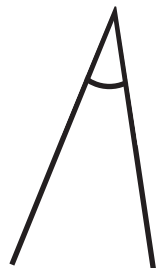

--	--	--

2. a)  b)  c) 

--	--	--

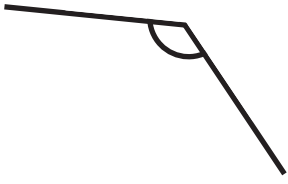
3. a)  b)  c) 

--	--	--

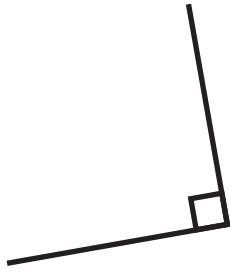
4. a)  b)  c) 

--	--	--

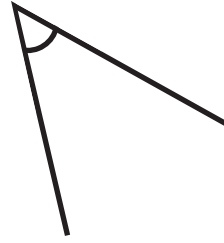
5. a)



b)



c)

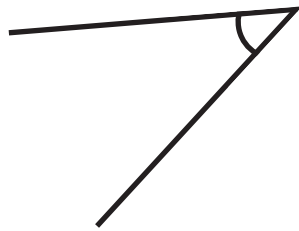


--	--	--

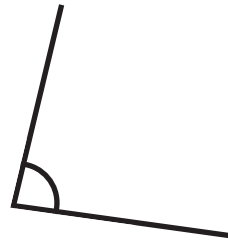
6. a)



b)

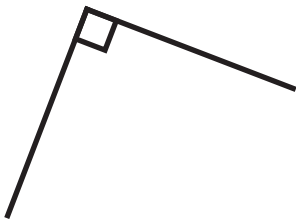


c)

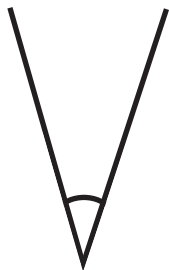


--	--	--

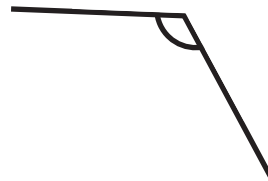
7. a)



b)

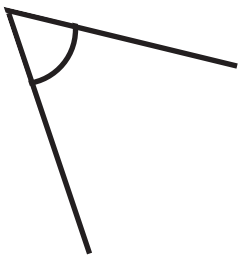


c)

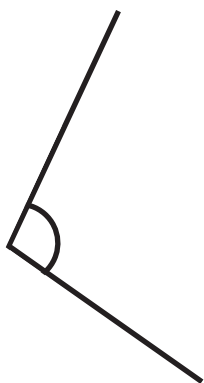


--	--	--

8. a)



b)

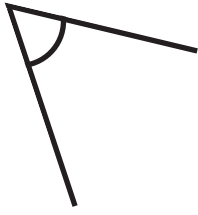


c)

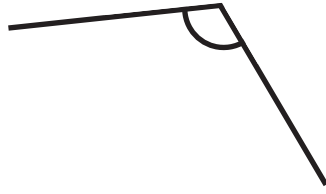


--	--	--


9. a)



b)

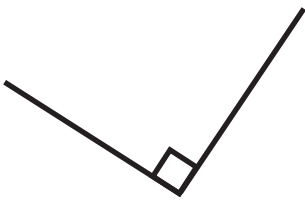


c)



--	--	--

10. a)



b)



c)



--	--	--

Challenge

Draw three angles in order of size from smallest to largest.

Ordering Angles **Answers**

1.

b	c	a
----------	----------	----------

2.

b	a	c
----------	----------	----------

3.

c	b	a
----------	----------	----------

4.

b	a	c
----------	----------	----------

5.

c	b	a
----------	----------	----------

6.

b	c	a
----------	----------	----------

7.

b	a	c
----------	----------	----------

8.

a	b	c
----------	----------	----------

9.

a	c	b
----------	----------	----------

10.

b	a	c
----------	----------	----------