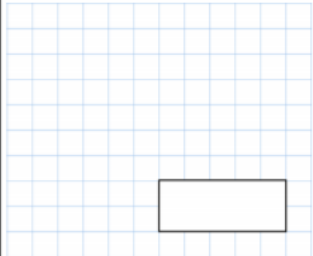
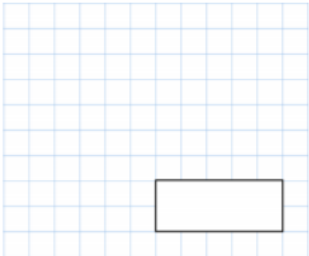
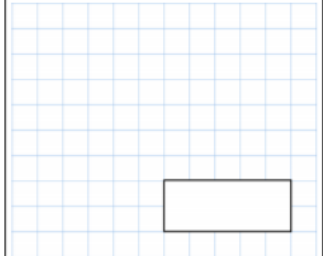
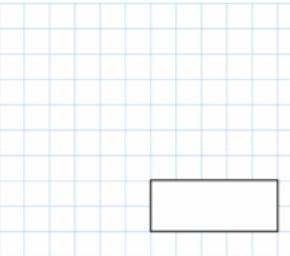



Friday starter

Mild

$305 - 20$ 	7×7 								
<p>Sharon has a bag of 32 biscuits.</p> <p>$\frac{1}{4}$ of the biscuits are chocolate.</p> <p>How many biscuits are chocolate?</p>									
<p>Jessica asked her friends their favourite colour.</p> <p>Key ○ = 2 children</p> <table border="1" style="width: 100%;"> <tr> <td style="width: 30%;">Blue</td> <td>○ ○</td> </tr> <tr> <td>Green</td> <td>○ ○ ○</td> </tr> <tr> <td>Pink</td> <td>○ ◐</td> </tr> <tr> <td>Red</td> <td>○ ○</td> </tr> </table>	Blue	○ ○	Green	○ ○ ○	Pink	○ ◐	Red	○ ○	<p>How many picked blue?</p> <p>How many friends did she ask altogether?</p>
Blue	○ ○								
Green	○ ○ ○								
Pink	○ ◐								
Red	○ ○								

Spicy

16×100 	$5.6 - 2.9$ 
<p>At 9am, there were 812 cars in a car park.</p> <p>By 10am, 95 cars had left the car park</p> <p>239 cars had entered the car park</p>	<p>How many cars are there in the car park at 10am?</p>
<p>Draw all lines of symmetry on this triangle</p>	
<p>Kali is doing sit-ups</p> <p>She does 7 sit-ups every ten seconds.</p> <p>How many sit-ups does she do in three minutes?</p>	