

Three Cards

The Problem

Here are some fraction cards.



- Each fraction has 7 as the denominator.
- A is twice as big as B.
- The sum of the cards is 1

What could the cards be?

My Solution

The Symbol

The Problem

The symbol  means

Double the first number and then
subtract the second number

Calculate

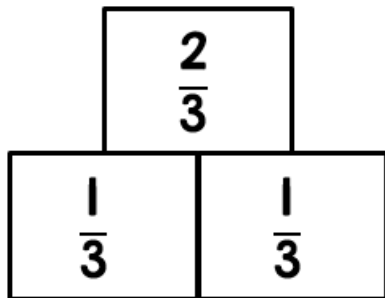
$$\frac{2}{5} \text{  } \frac{3}{5}$$

My Solution

Pyramids 1

The Problem

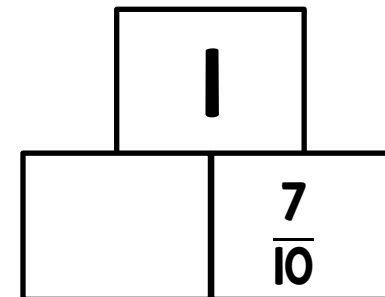
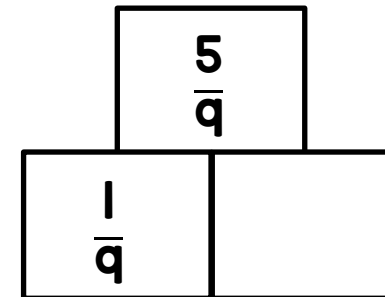
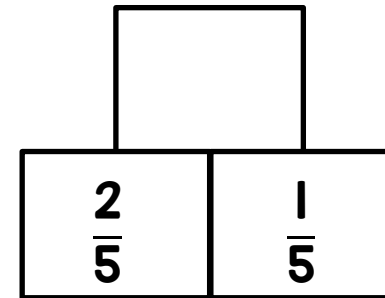
Here is a fraction pyramid.



The number above is calculated by adding the two fractions below.

Work out the missing numbers in the pyramids opposite.

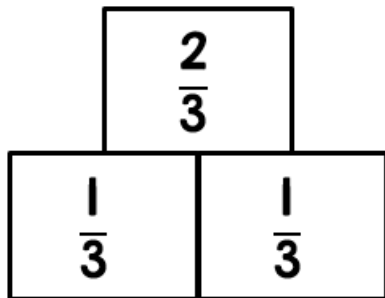
My Solution



Pyramids 2

The Problem

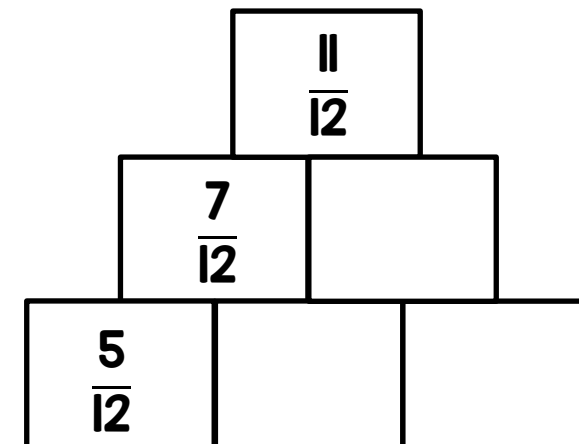
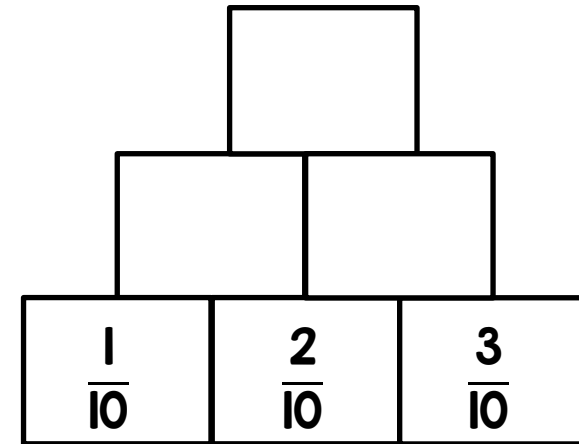
Here is a fraction pyramid.



The number above is calculated by adding the two fractions below.

Work out the missing numbers in the pyramids opposite.

My Solution



Total Length

The Problem

This line is $\frac{3}{20}$ of a metre long.



This line is $\frac{4}{20}$ metre longer than the line above.



What is the total length of the two lines?

Can you write your answer in cm too?

My Solution