


Time, Length and Capacity Challenge Cards



Time, Length and Capacity Challenge Cards



1. James got on the train at 11am. The journey took 1 hour. What time did he get off the train?



twinkl.com

Time, Length and Capacity Challenge Cards



2. Betty met her friends at the cafe at 11am. She left at 12.30. How long was she there for?



twinkl.com

Time, Length and Capacity Challenge Cards



3. Darcy walks to her dance class. It takes 30 minutes and she needs to arrive at 6pm. What time should she leave at?




twinkl.com



4. Georgia starts the race at 1pm. She finishes at 2pm. How long did she take to finish? The last person crosses the finish line at 2.30pm. How long did they take?



5. John has a stick that measures 1m. Dave has a stick that measures 2m. If they joined them together, how long would they be?



6. Mark is 86cm tall and Alex is 96cm tall. Who is taller?




7. One lollipop stick is 10cm long and the other is 15cm. How long would they be if they were joined together?






8. One car measures 2 metres long. How long does my drive need to be to fit 2 cars on?



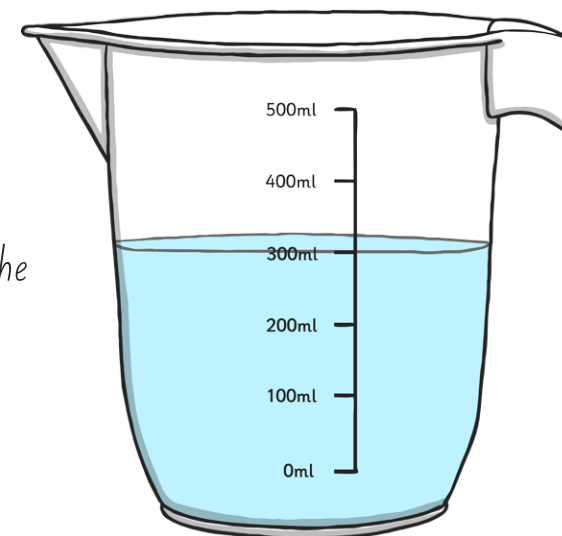
9. Laura's watering can holds 4 litres. How many litres would there be if she has 2 watering cans?



10. The bottle holds 2 litres of milk. If I needed 10 litres of milk, how many bottles would I need?



11. Morgan's jug holds 600ml. The glasses hold 100ml each. How many glasses could she fill with a full jug?







12. The water tray needs 50 litres to fill it up.
The bucket holds 5 litres.
How many buckets of water will they need?



13. James got on the train at 11.30am. The journey took 45mins. What time did he get off the train?



14. Betty met her friends at the cafe at 11am. She left at 11.15am. How long was she there for?



15. Darcy walks to her dance class. It takes 45 minutes and she needs to arrive at 6pm. What time should she leave at?






16. Georgia starts the race at 1pm. She finishes at 1.45pm. How long did she take to finish? The last person crosses the finish line at 2.15pm. How long did they take?



17. John has a stick that measures 1m. Dave has a stick that measures 1.5m. If they joined them together, how long would they be?



18. Mark is 86cm tall and Alex is 96cm tall. Who is taller and by how much?



19. One lollipop stick is 12cm long and the other is 15cm. How long would they be if they were joined together?






20. One car measures 2 metres long. If my drive is 6m long, how many cars will fit on it?



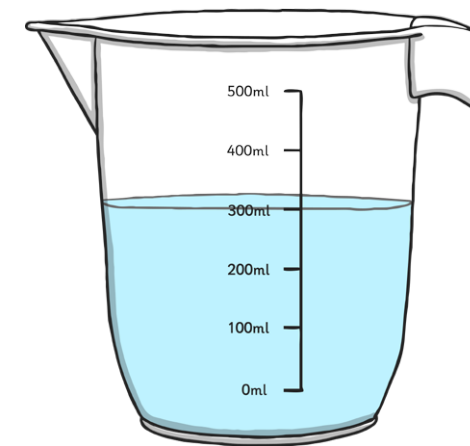
21. Laura's watering can holds 2.5 litres. How many litres would there be if she has 2 watering cans?



22. The bottle holds 2.5 litres of milk. If I needed 10 litres of milk, how many bottles would I need?



23. Morgan's jug holds 600ml. The glasses hold 100ml each. Can she fill two glasses with a full jug? Is there any left? How much?





24. The water tray needs 30 litres to fill it up.

The bucket holds 5 litres.

How many buckets of water will they need?



twinkl.com

Time, Length and Capacity Challenge Cards Answers

1. 12pm
2. 1 hour 30 minutes
3. 5:30pm
- 4a. 1 hour
- 4b. 1 hour 30 minutes
5. 3 metres
6. Alex
7. 25 centimetres
8. 4 metres
9. 8 litres
10. 5
11. 6
12. 10
13. 12:15pm
14. 15 minutes
15. 5:15pm
- 16a. 45 minutes
- 16b. 1 hour 15 minutes
17. 2.5 metres
- 18a. Alex
- 18b. 10 centimetres
19. 27 centimetres
20. 3
21. 5 litres
22. 4
- 23a. Yes
- 23b. 400 millilitres
24. 6